



MADRASAH IRSYAD ZUHRI AL-ISLAMIAH

PRIMARY ONE

MATHEMATICS
SAMPLE ENTRANCE TEST PAPER

Name: _____

© Madrasah Irsyad Zuhri Al-Islamiah

This Sample Entrance Test paper may be used for personal purpose only. The use of this paper for commercial purpose is strictly not allowed.


1. Count and write the correct number. (2 marks)

a)



There are _____ apples.

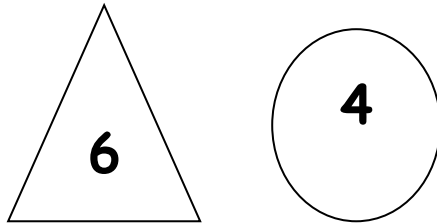
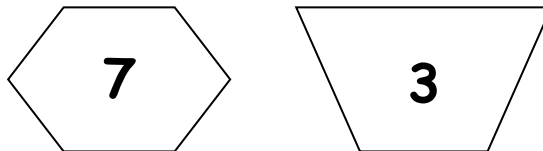
b)



There are _____ robots.

2. Write in words. (2 marks)

2	
8	


3. Colour the correct shape. (2 marks)**a) Which number is smaller?****b) Which number is greater?****4. Fill in the blanks. (2 marks)**

1	2	3	4	5	6	7	8	9	10
---	---	---	---	---	---	---	---	---	----

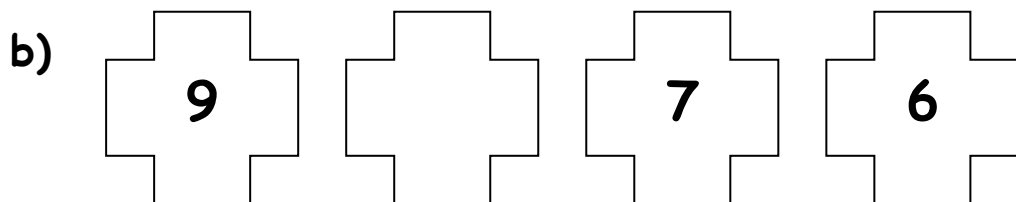

a) 1 more than 6 is _____.**b) 1 less than 10 is _____.**

5. Circle 2 groups that have the same number.

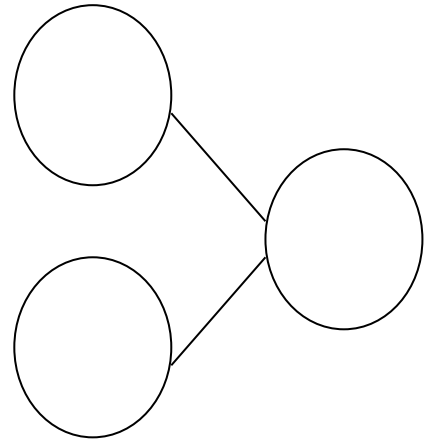

(2 marks)




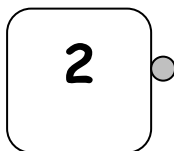
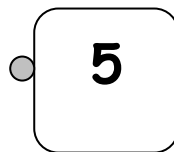
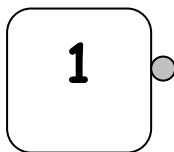
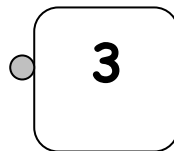
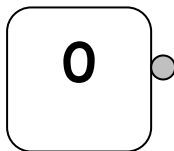
6. Complete each number pattern. (2 marks)



7. Look at the picture. Complete the number bond.
(3 marks)



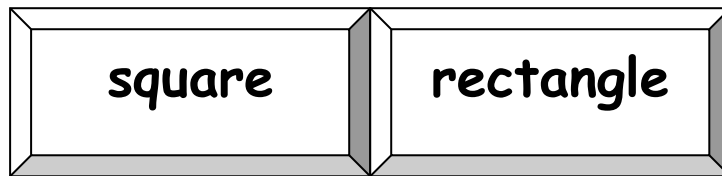
8. Match to make 5. (3 marks)




9. Look at the pictures below.

Fill in the blanks.

Use the helping words in the boxes. (2 marks)

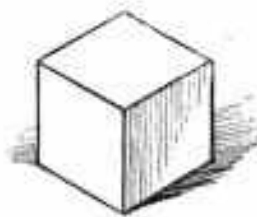


a)



The shape of the table top is a _____.

b)




The shape of one side of the cube is a

_____.

10. Look at the picture below.

Fill in the blanks. (2 marks)



a) The 3rd person from the finishing line is

_____.

b) The 1st person from the finishing line is

_____.

11. Do these sums. (4 marks)

(a) Siti has 5 hair clips.

Mary gives her 4 more hair clips.

How many hair clips does Siti have now?

$$\square \bigcirc \square = \square$$

Siti has _____ hair clips now.

b) Tom has 8 blue and green marbles altogether.

5 marbles are blue.

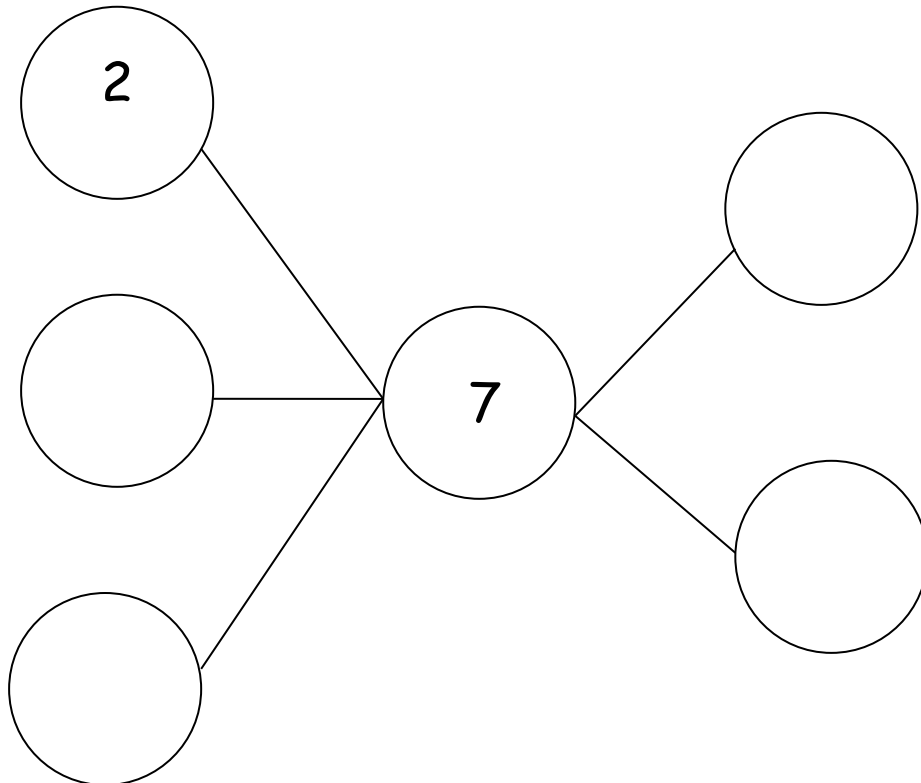
How many marbles are green?

$$\square \bigcirc \square = \square$$

There are _____ green marbles.

12. Use the numbers 1, 3 and 4 in the circles below to make 7. Numbers may be used more than once.

(4 marks)



End of Paper