



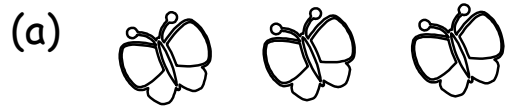
**Madrasah Al-Irsyad Al-Islamiah
P1 Entrance Assessment
Sample Paper
Mathematics**

Name: _____

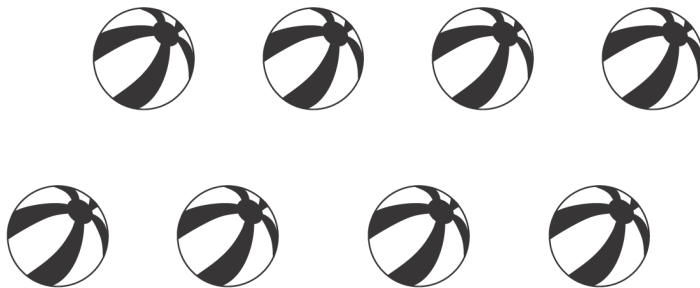
Class: _____

MATHEMATICS

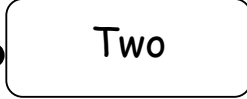
1) Count and write the number in the box.

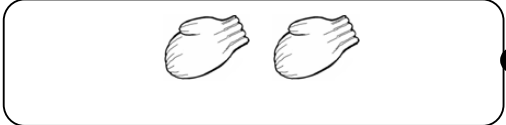
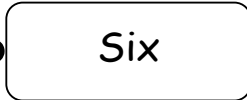


2) Circle four balls. (1 mark)



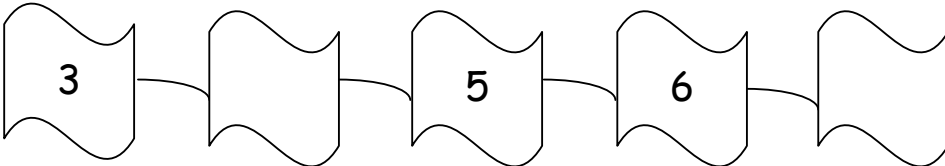
3) Count and match to the correct word. (5 marks)


(a)  

(b)  



(c)  

4) Fill in the blanks with the missing numbers. (6 marks)

(a) 

(b) 

5) Tick the set that has more. (1 mark)

6) Circle the 4th leaf. (1 mark)



1st


7) Draw the shape that comes next in each pattern.

(2 marks)



8) Do these sums.

(a)




$$\boxed{4} \quad \bigcirc + \quad \boxed{2} \quad \bigcirc = \quad \boxed{}$$

(b) Tim has 9 ice-creams.

Sam has 5 ice-creams.

How many more ice-creams does Tim have?

$$\boxed{} \quad \bigcirc \quad \boxed{} \quad \bigcirc \quad \boxed{}$$



Tim has _____ more ice-creams.